



The Punjab School

Admission Test Syllabus to Class II 2024
(Doc No : SyID- 07)

Issue Date:

Issue No. 01

Revision No. 00

Page 1 of 9

This is for the information of the parents that a few vacancies for admission to the class arise due to transfers and posting of parents to other cities or for some other personal reasons. These are purely merit-based admissions.

Admissions to these vacancies are finalized on the basis of the results of the written examination in the subjects of English, Urdu and Mathematics and a subsequent interview. An oral test of Quran is conducted separately.

Syllabi for the written examination is given below:

ENGLISH:

- *Sentence Making, Dictation, Reading and Handwriting
- *Use of was, were, a, an, is, am, are.
- *Use of this, that, these, those, their, there (capital letter, full stop),
- *Position words, Adjectives, Nouns, Action Words.
- *Words / Opposites, Masculine / Feminine,
- * Singular / Plural, Days of the week, Months of the year.
- *Composition writing (8 sentences on any animal, or things, vegetables)

MATHEMATICS

Whole Numbers, Number Operations (Addition and Subtraction), Money
Measurement (Length, Mass), Time, Geometry, Money

Urdu:

املا، جملے، جوڑ توڑ، ہلکی اور بھاری آوازوں کا فرق، اسم اور فعل کی پہچان، ہم آواز الفاظ، الفاظ متضاد، واحد/جمع، مذکر/مؤنث، حروف جار،
* تخلیقی تحریر: پھل، مقامات، (آٹھ سطریں) * ہفتے کے دنوں اور سال کے مہینوں کے نام * لفظی گنتی: ۲۰ تا * پرندوں، جانوروں، رنگوں،
موسموں، پھولوں اور شہروں کے نام * خوش خطی، تفہیم عبارت

Quran:

پارہ عم (سورۃ الناس تا سورۃ اللہب) بمرحہ، (مخارج اتناغ، ق تاج، ش، ی) * نماز: ثنا، سورہ فاتحہ، سورۃ الاخلاص
* دعائیں: صبح جاگتے وقت کی دُعا، سوتے وقت کی دُعا، سبق: (7 تا 11) (قرآنی قاعدہ)

A list of successful candidates is displayed on the notice boards in their respective wings. The parents have to collect information sheets, book list, syllabi, etc along with the prescribed Admission Form from the relevant wing office. Correctly filled in Admission Form duly signed by the wing head, accompanied with the dues, is submitted in the Fee Section.

Only after the observance of the above- mentioned formalities, a student correctly attired in prescribed School Uniform and possessing the relevant books and stationary, is eligible to sit in the class.

Note: Model Question papers are enclosed. Please note that **prescribed topics** are purely guidelines as per level I for preparation of the Admission Test. Marks allocation and nature of questions in actual papers may vary in any subject.

Test Date: Sunday 11th February, 2024 at 8:30 am

CONTROLLED DOCUMENT

Unauthorized duplication is prohibited



The Punjab School

Admission Test Model Paper to Class II 2024
(Doc No : SyID- 07)

Issue Date: 08-11-2023

Issue No. 01

Revision No. 00

Page 2 of 9

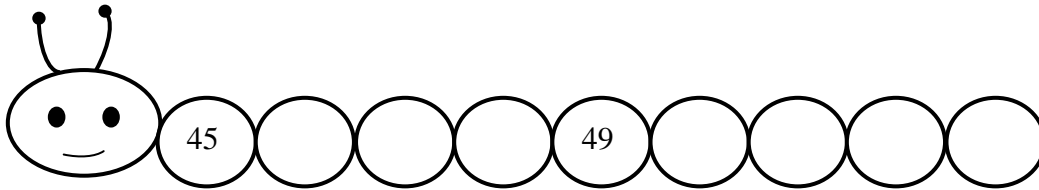
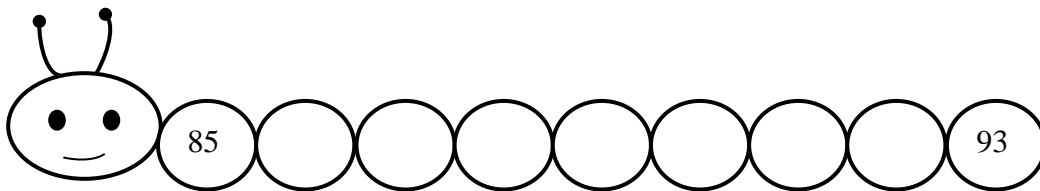
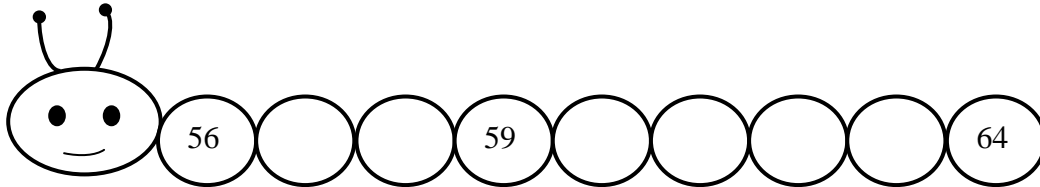
Time: 1 hour 30 Min

Mathematics

Marks: 75

Q1 (a) Write the missing numbers.

6 (20)



(b) Write number between the number

4

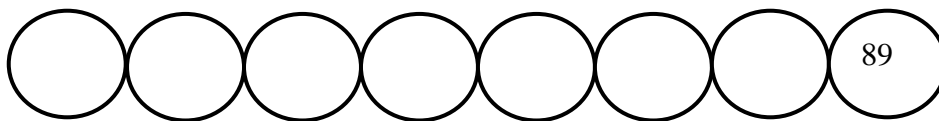
27		29
----	--	----

46		48
----	--	----

98		100
----	--	-----

(c) Count backward

2



(d) Write the ordinal numbers from left.

3



--

--

--

--

--



The Punjab School

Admission Test Model Paper to Class II 2024
(Doc No : SyID- 07)

Issue Date: 08-11-2023

Issue No. 01

Revision No. 00

Page 3 of 9

(e) Write in ascending order.

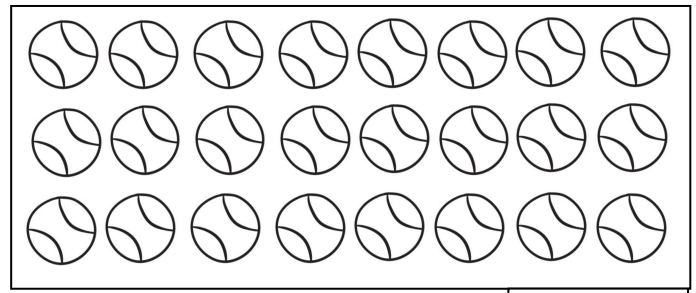
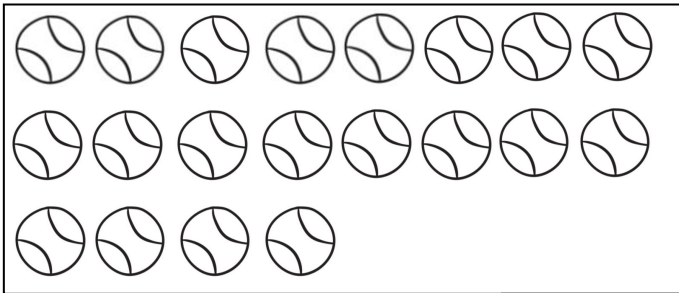
3

21, 24, 23, 25, 22

_____ , _____ , _____ , _____ , _____

(f) Count and fill in the blanks.

2



20 is _____ less than 24

Q2 (a) Solve:

6

(30)

$$\begin{array}{r} 2 \quad 1 \\ + \quad 6 \\ \hline \end{array}$$

$$\begin{array}{r} 6 \quad 4 \\ + \quad 5 \\ \hline \end{array}$$

$$\begin{array}{r} 3 \quad 3 \\ + \quad 2 \\ \hline \end{array}$$

$$\begin{array}{r} 7 \quad 5 \\ + \quad 3 \\ \hline \end{array}$$

$$\begin{array}{r} 7 \quad 1 \\ + \quad 4 \\ \hline \end{array}$$

$$\begin{array}{r} 5 \quad 3 \\ + \quad 4 \\ \hline \end{array}$$



The Punjab School

Admission Test Model Paper to Class II 2024
(Doc No : SyID- 07)

Issue Date:

Issue No. 01

Revision No. 00

Page 4 of 9

(b) Solve:

6

$$\begin{array}{r} 5 \\ -0 \\ \hline \end{array}$$

$$\begin{array}{r} 6 \\ -3 \\ \hline \end{array}$$

$$\begin{array}{r} 7 \\ -2 \\ \hline \end{array}$$

$$\begin{array}{r} 9 \\ -5 \\ \hline \end{array}$$

$$\begin{array}{r} 8 \\ -3 \\ \hline \end{array}$$

$$\begin{array}{r} 6 \\ -4 \\ \hline \end{array}$$

(c) Solve:

12

$$\begin{array}{r} 1 \quad 5 \\ +6 \quad 3 \\ \hline \end{array}$$

$$\begin{array}{r} 4 \quad 7 \\ +2 \quad 2 \\ \hline \end{array}$$

$$\begin{array}{r} 6 \quad 2 \\ +3 \quad 5 \\ \hline \end{array}$$

$$\begin{array}{r} 7 \quad 5 \\ +2 \quad 3 \\ \hline \end{array}$$

$$\begin{array}{r} 3 \quad 6 \\ +6 \quad 2 \\ \hline \end{array}$$

$$\begin{array}{r} 2 \quad 9 \\ +5 \quad 0 \\ \hline \end{array}$$

(d) Solve:

6




$$\begin{array}{r} 6 \quad 2 \\ -2 \quad 2 \\ \hline \end{array}$$

$$\begin{array}{r} 7 \quad 9 \\ -4 \quad 5 \\ \hline \end{array}$$

$$\begin{array}{r} 9 \quad 9 \\ -8 \quad 2 \\ \hline \end{array}$$

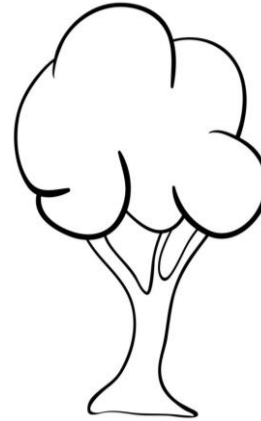


Q3 (a) Tick the longest.

(10)






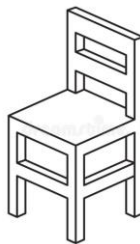
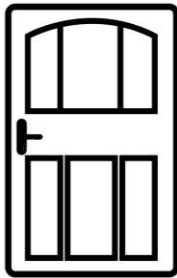
(b) Colour the taller.



(c) Write "1" for light, 2 for lighter and 3 for the lightest.



(d) Tick (✓) the heaviest.



(e) Colour the shortest flower pot.





The Punjab School

Admission Test Model Paper to Class II 2024
(Doc No : SyID- 07)

Issue Date:

Issue No. 01

Revision No. 00

Page 6 of 9


Q4 Match the same amount of money.

(10)

Q5 Write number of rectangle in the following figure.

(5)





The Punjab School

Admission Test Model Paper to Class II 2024
(Doc No : SyID- 07)

Issue Date:

Issue No. 01

Revision No. 00

Page 7 of 9

Time: 1 hour 30 Min

English

Marks: 75

Q.1 Make sentences using the following words: 8

- i. eating ii. ball iii. like iv. water

Q.2 (a) Fill in the blanks with a or an: 4

- i. _____ monkey is holding _____ umbrella.
ii. _____ fox is riding on _____ elephant.

(b) Fill in the blanks with their or there: 4

- i. The children went to visit _____ grandparents.
ii. What do you see over _____?

Q.3 Choose the correct option by using is, are, am: 4

- i. She _____ a beautiful girl.
(a) is (b) are (c) am
ii. These _____ my brother and sisters.
(a) am (b) are (c) is

Q4 Write days of the week: 5

_____ Tuesday _____
Friday _____

Q 5 (a) Underline the Action Words in the given sentences: 5

- i. Amna is eating an apple.
ii. They are walking on a road.
iii. Ali is sitting quietly.
iv. We are running.
v. You are sleeping.

(b) Circle the noun in the given sentences: 7

- i. She is a girl.
ii. A cat is on the wall.
iii. Maha has two pencils.
iv. Ahmed is a doctor.

Q.6 Write 8 sentences on any one of the following topics: 8

- i) A Carrot, ii) A Cow

CONTROLLED DOCUMENT

Unauthorized duplication is prohibited



The Punjab School

Admission Test Model Paper to Class II 2024
(Doc No : SylD- 07)

Issue Date:

Issue No. 01

Revision No. 00

Page 8 of 9

Q.7 (a) Look at the pictures and fill in each blank with suitable position

word: on , under, in.

4

- i. The red apple is _____ the tree.
- ii. The cat is _____ the table.
- iii. The fish is _____ the water.

(b) Circle the adjective in each sentence:

4

- i. She has a pretty doll.
- ii. The dog has a short tail.
- iii. He is driving a small car.
- iv. It is a rainy day.

(c) Match masculine noun with feminine noun:

4

father	tigress
lion	lioness
tiger	niece
nephew	mother

Q.8 (a) Dictation

8

(b) Reading

5

(c) English Handwriting

5

