



THE PUNJAB SCHOOL Admission Test To Class I

This is for the information of the parents that vacancies for admission to this class is granted subject to availability of seats. These are purely merit-based admissions.

Admissions to these vacancies are finalized on the basis of the results of the written examination in the subjects of English, Urdu and Mathematics. An oral test for Quran is conducted separately. **Syllabi for the written examination are as follows:**

ENGLISH

- Naming the pictures (3 – 4 letter words).
- Make words (a – z)
- Picture sentences, words sentences
- Writing the names of colours, fruits, vegetables (any eight).
- Use of a, an, in and on
- Composition writing (5 sentences about apple ,mango, carrot, cat, myself)
- Days of the week.
- Singular/Plural, Masculine/Feminine, Words/Opposites
- Dictation (4-5 letters words). eg girl , table
- English writing (4 lines)
- Reading from the textbook.
- Word Building
- Doing words

MATHEMATICS

*Counting to 20, Comparing and ordering number making number bonds, *Addition and subtraction within 20, * Naming position, *Naming left and right positions, * Recognizing shapes rectangles, Square, Circle and Triangle, Comparing object, *Finding lengths of objects, * Counting Figures 0 – 250.

Urdu:

* پڑھائی، لکھائی: حروف تہجی، چھوٹی اشکال، * الفاظ کے جوڑ توڑ/ توڑ جوڑ، * آے (دود والفاظ بنائیے)، جملے * ہفتے کے دنوں کے نام
* موسموں کے نام، * پانچ سبزیوں کے نام * مذکر مونث، واحد جمع، لفظی گنتی: اتا، ۱۰، * تخلیقی لکھائی: پسندیدہ پھل (تین جملے) * املا
* خوش خطی: (چار لائنوں میں)

Quran

* تعوذ، تسمیہ، سورۃ فاتحہ، سورۃ الاخلاص (زبانی)

A list of successful candidates is displayed on the notice boards in their respective wings. The parents have to collect booklet along with the prescribed Admission Form from the relevant wing office. Correctly filled in Admission Form duly signed by the wing head, accompanied with the dues, is submitted in the Fee Section.

Only after the observance of the above mentioned formalities, a student correctly attired in prescribed School Uniform and possessing the relevant books and stationary, is eligible to sit in the class.

Note: Model Question papers are enclosed. Please note that **prescribed topics** are purely guidelines. Marks allocation and nature of questions in actual papers may vary in any subject.

Test Date: Thursday 24th September, 2020 at 8:30 am

MODEL PAPER FOR ADMISSION TO CLASS I

English

Time: 1 hour 30 Min

Marks: 50

Q1. Write the name of the following picture:

4



Key

Q2. Make words with given letters:

4

g _____ , _____ ,

Q3. Use of a, an, in or on:

4

(i) The cup is on the table.

Q4. Write the colours name:

3

Q5. Make sentences.

4

(i) Bird: This is a bird.



Q6. (a). Write opposites of the following:

3

sit _____

(b). Write feminine of the following:

3

boy _____

(c). Write plurals of the following:

3

pencil _____ , doll _____

Q7. Write days of the week.

3

Q8. (a) Dictation.

5

(b) Reading.

6

(c) English Writing:

4

Q9. Write 5 sentences about "Apple"

4

MODEL PAPER FOR ADMISSION TO CLASS I

Mathematics

Time: 1 hour 30 Min

Marks: 50

Q1: (a) Dodging counting

/6

i. _____ ii. _____ iii. _____ iv. _____ v. _____

(b) Fill in the blanks.

(i) The number name of 8 is _____

(ii)  _____

(iii) 


There are _____ apples than trees (more , fewer)

(c) Arrange the numbers from the greatest to the smallest.

2 , 8 , 9 , 3 , 6


Q2: a (i) Complete the number bonds.

/12



6

_____ and _____ make 6



5

_____ and _____ make 5

(b) Matching

/8

7

(4 , 1)

5

(4 , 3)

10

(6 , 3)

9

(8 , 2)

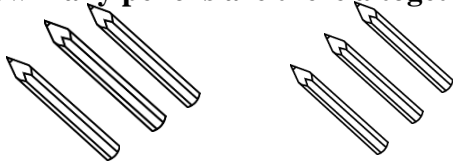
Q3:(a)Add these.

/4 (12)

$\begin{array}{r} 4 \\ + 6 \\ \hline \hline \end{array}$	$\begin{array}{r} 0 \\ + 3 \\ \hline \hline \end{array}$	$\begin{array}{r} 2 \\ + 3 \\ \hline \hline \end{array}$	$\begin{array}{r} 8 \\ + 2 \\ \hline \hline \end{array}$	$\begin{array}{r} 4 \\ + 2 \\ \hline \hline \end{array}$
--	--	--	--	--

(b) How many pencils are there altogether.

/4



+ =

There are _____pencils altogether.

(c) There 3 boys and 4 girls in a park. How many children are there altogether.

/4

$$\begin{array}{r} \square \\ + \square \\ \hline \hline \end{array}$$

There are _____ children altogether.

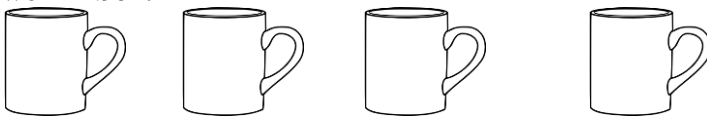
Q4:(a) Subtract.

/5 (10)

$\begin{array}{r} 5 \\ - 2 \\ \hline \hline \end{array}$	$\begin{array}{r} 7 \\ - 3 \\ \hline \hline \end{array}$	$\begin{array}{r} 8 \\ - 0 \\ \hline \hline \end{array}$	$\begin{array}{r} 4 \\ - 2 \\ \hline \hline \end{array}$	$\begin{array}{r} 9 \\ - 3 \\ \hline \hline \end{array}$
--	--	--	--	--


(b) Cross out the correct number of things. Then write the answer in box.

/1



4 - 2 =

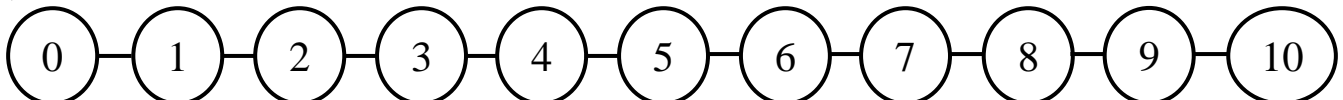
(c) There are 10 beads.4 beads are taken away. How many beads are left. /2



- =

There are _____beads left.

(d) Count backwards and write the correct answer in the box. /2



6 - 4 =

Q5:(a) Matching.

/4

/10

10th	fourth
3rd	tenth
7th	third
4th	seventh

(b) Write the position of circled object in words.

/3



1st



1st

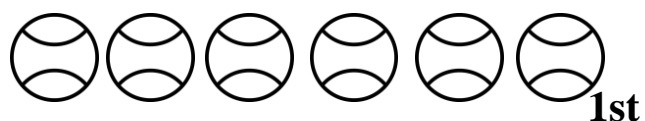
(c) Draw a cherry  on the 10th cupcake from the right.

/3



(d) Colour the 4th ball.


/2



دی پنجاب سکول لاہور
ماڈل پیپر برائے داخلہ جماعت اول
پرچہ اُردو

کل نمبر: 50

وقت: ایک گھنٹا تیس منٹ

- سوال نمبر 1- مندرجہ ذیل حروف کی چھوٹی اشکال لکھیے۔
گ _____
ہ _____
- سوال نمبر 2- مندرجہ ذیل حروف سے دو، دو الفاظ بنائیے (آ-ے)
ر: ا _____
م: ا _____
۲ _____
۲ _____
- سوال نمبر 3- (الف) درج ذیل الفاظ کے توڑ لکھیے۔
سیب: _____
قوم: _____
(ب) درج ذیل حروف کے جوڑ لکھیے۔
ب- و- ل- _____
خ- ا- ل- ی- _____
- سوال نمبر 4- (الف) جملے بنائیے۔


- (ب) مذکر کے مونث لکھیے۔
چڑا _____
دادا _____
- (ج) واحد کے جمع لکھیے۔
جالا _____
طوطا _____
- سوال نمبر 5- اردو میں گنتی لکھیے۔
چار _____
- سوال نمبر 6- ہفتے کے دنوں کے نام لکھیے۔
- سوال نمبر 7- کوئی سی تین سبزیوں کے نام لکھیے۔
(ا) املا
(ب) پڑھائی
(ج) خوش خطی
- سوال نمبر 8- تین جملے تحریر کیجیے۔ "آم"